



1. 'Parliament' is related to 'Great Britain' in the same way as 'Congress' is related to;

- A. Japan
- B. India
- C. U.S.A
- D. Netherlands
- E. Non of these

2. A roofing tile which has the shape of an S laid on its side

- A. Reflective tile
- B. Pan tile
- C. Ceramic Tile
- D. Reflective tile

3. Choose the alternative which is closely resembles the mirror image of the given combination.

**MAGAZINE**

(1) **MAGAZINE**

(2) **MAGAZINE**

(3) **MAGAZINE**

(4) **MAGAZINE**

- A. 1
- B. 2
- C. 3
- D. 4

4. 'Tree' is related to "Root" in the same way as "Smoke" is related to;

- A. Cigarette
- B. Fire
- C. Heat
- D. Chimney
- E. Wood


5. Identify the type of flooring



- A. Slate stone flooring
- C. Sandstone flooring

- B. Lime stone flooring
- D. Soap stone flooring

6. Find out the alternative figure which contains figure (X) as its part.



- A. A
- C. C

- B. B
- D. D

7. Identify the location of given Structure

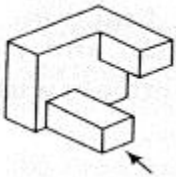


- A. delhi
- C. Rajasthan

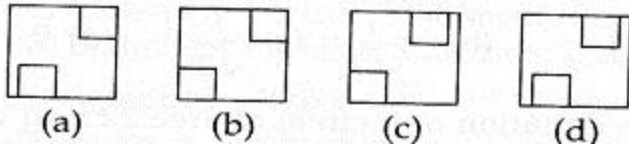
- B. punjab
- D. Amrister

8. the 3 D problem image shows the given of an object. identify the correct front view from among the answer figures looking in the direction of the arrow.

**Problem Figure**



**Answer Figures**



- A. A
- B. B
- C. C
- D. D

9. Select the odd one out among the following given words.

- A. Huge
- B. Tiny
- C. Heavy
- D. Small
- E. Big

10. Identify the given image



- A. Petronas tower
- B. Swiss re tower
- C. light house tower
- D. twin building

11. In each of the following questions, you are given a combination of alphabets and/or numbers followed by four alternatives (1), (2), (3) and (4). Choose the alternative which is closely resembles the water-image of the given combination.

**QUARREL**

- (1) QUAEREL
- (2) QUARRER
- (3) QUARRER
- (4) QUARRER

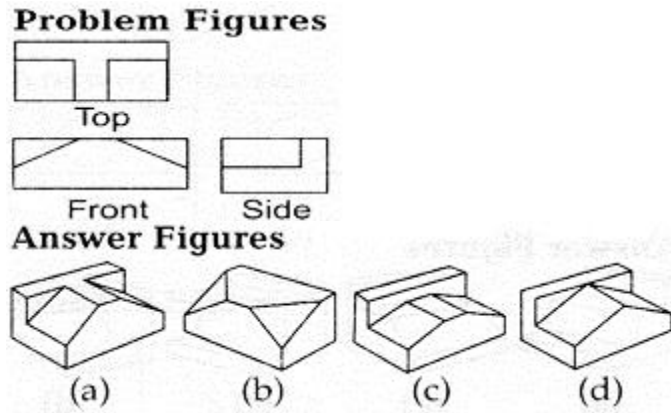
- A. 1
- B. 2
- C. 3
- D. 4

12. Select the odd one out among the following given words.

- A. Aluminium
- B. Copper
- C. Brass
- D. Magnesium

E. Brick

13. the following questions shows the top, side and the front views of a 3 D object. Identify the correct elevations among the answer figures.



A. A

B. B

C. C

D. D

14. This book is not long. I \_\_\_\_ it by lunch time.

A. will be reading

B. will have read

C. reading

D. none

15. Identify the given image



A. "Twin tower "

B. Empire state building

C. pentagon

D. White house

16. Contamination; Food; Infection;?

A. Germs

B. Disease

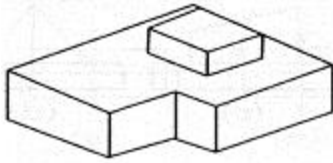
C. Disease

D. Microbes

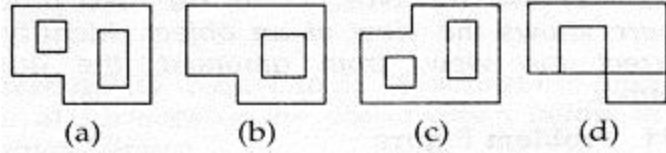
E. Medicines

17. the 3 D problem figure shows the view of an object. Identify it's top view from among the answer figure.

**Problem Figure**



**Answer Figures**



- A. A
- C. C

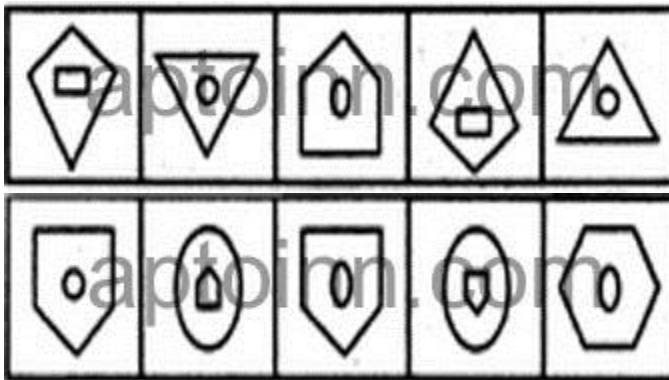
- B. B
- D. D

18. what is the term used for the art of beautiful writing ?

- A. bibilography
- C. heiroglaphics

- B. calligraphy
- D. lithography

19. Select a figure from among the Answer Figures which will continue the same series as established by the five Problem Figures.



- A. A
- C. C
- E. E

- B. B
- D. D

20. Which word is the synonym of "cite"

- A. galvanize
- C. locate

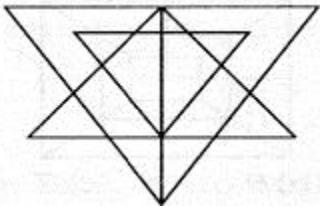
- B. quote
- D. visualize

21. Identify the given image



- A. Ancient colossus
- B. Statue of Zeus
- C. Liberty Statue
- D. None of the above

22. FIND THE TOTAL NO. OF TRIANGLES GIVEN IN THE PROBLEM FIGURE.



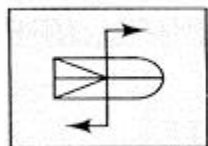
- A. 27
- B. 23
- C. 21
- D. 25

23. The world's tallest twisted tower is...

- A. Burj Khalifa
- B. Infinity Tower
- C. Tokyo Sky Tree
- D. BREN Tower

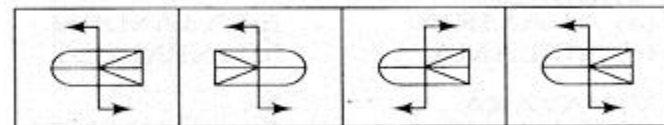
24. in each of the following question choose the correct mirror image of the figure (X) from amongst the four alternatives (a,b,c,d) along with it.

**Problem Figure**



(X)

**Answer Figures**



(a)

(b)

(c)

(d)

- A. A
- B. B
- C. C
- D. D

25. Identify the type of flooring



- A. Plastic flooring
- C. Asphalt flooring

- B. Fabric flooring
- D. Linoleum flooring

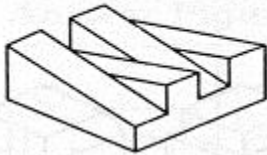
26. Select the odd one out among the following given words.

- A. Mars
- C. Saturn
- E. Venus

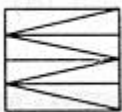
- B. Jupiter
- D. Sun

27. The 3 D problem figure shows the view of an object. Identify its top view from among the answer figure.

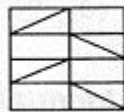
**Problem Figure**



**Answer Figures**



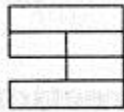
(a)



(b)



(c)



(d)

- A. A
- C. C

- B. B
- D. D

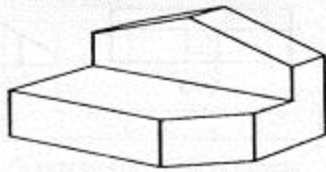
28. Which word is the antonyms of "hamper"

- A. execute
- C. illusion

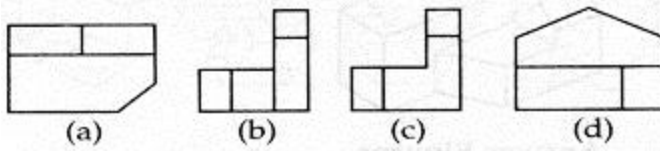
- B. support
- D. exercise

29. The 3 D problem figure shows the view of an object. Identify its top view from among the answer figure.

**Problem Figure**

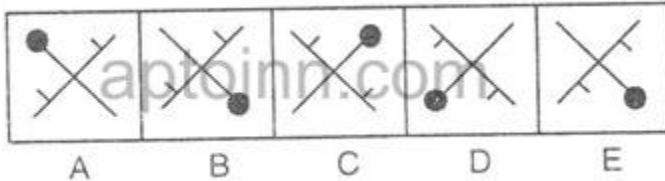


**Answer Figures**



- A. A
- B. B
- C. C
- D. D

30. In each of the following questions one of the figures is different from the rest. Spot the figure.



- A. A
- B. B
- C. C
- D. D
- E. E

31. 'Kanchipuram' is in which of the following states?

- A. Andhra Pradesh
- B. Orissa
- C. Kerala
- D. Tamil Nadu

32. In each of the following questions, you are given a combination of alphabets and/or numbers followed by four alternatives (1), (2), (3) and (4). Choose the alternative which is closely resembles the water-image of the given combination.

**DISC**

- (1) CSID
- (2) CSID
- (3) DISC
- (4) DISC

- A. 1
- B. 2
- C. 3
- D. 4

33. Shape of building suitable for cyclone resistance is



- A. Square
- C. Circle

- B. Rectangle
- D. Triangle

34. Which word is the antonyms of DRAW

- A. allure
- C. haul

- B. induce
- D. alienate

35. Which foreign influence is seen in the rock cut architecture of India?

- A. Arabic
- C. Indo-European

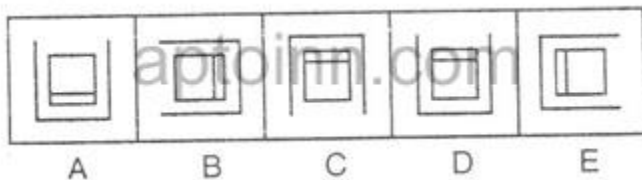
- B. Persian
- D. Greek

36. Sports' is related to ' Logo in the same way as Nation is related to;

- A. Emblem
- C. Rular
- E. Non of these

- B. Animal
- D. Anthem

37. In each of the following questions one of the figures is different from the rest. Spot the figure.



- A. A
- C. C
- E. E

- B. B
- D. D

38. Zero was innvented by

- A. Aryabhatta
- C. Varahamihira

- B. Bhaskara
- D. none of these

39. WHAT IS THE MATERIAL USED FOR THIS BUILDING?

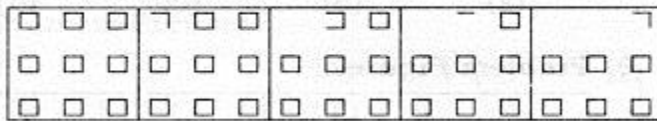


- A. TERRACOTTA
- C. TIMBER

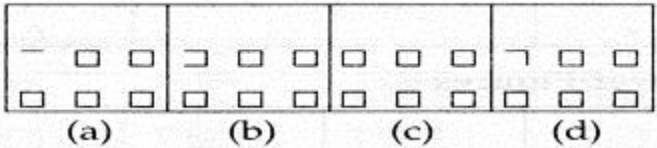
- B. ASBESTOSE
- D. MARBLE

40. in each of the following questions which figure must come after the problem figure if the sequence is continuous.

**Problem Figures**



**Answer Figures**



- A. A
- C. C

- B. B
- D. D

Ans:

- |       |       |       |       |       |       |       |       |       |       |
|-------|-------|-------|-------|-------|-------|-------|-------|-------|-------|
| 1. C  | 2. B  | 3. D  | 4. B  | 5. A  | 6. D  | 7. D  | 8. A  | 9. C  | 10. B |
| 11. A | 12. E | 13. A | 14. B | 15. D | 16. C | 17. B | 18. B | 19. C | 20. B |
| 21. A | 22. C | 23. B | 24. B | 25. D | 26. D | 27. C | 28. B | 29. A | 30. B |
| 31. D | 32. C | 33. C | 34. D | 35. B | 36. A | 37. D | 38. A | 39. A | 40. C |